

Grade 3

Place Value 1

Q 1.

Write the correct number in the blank.

$$2675 = 2000 + \underline{\hspace{2cm}} + 70 + 5$$

$$8452 = \underline{\hspace{2cm}} + 400 + 50 + 2$$

Q 2.

Write the number: 5 thousands, 9 hundreds, 3 tens, and 1 one

Q 3.

Write the number is odd or even : 36

Q 4.

Write the number in standard form : $200+30+4$

Q 5.

Write the number in standard form : seven hundred eighty

Q 6.

Write the value of the underlined digit : 893

Q 7.

Write in standard form : $1000+500+70+1$

Q 8.

Write in expanded form : 6,082

Q 9.

Write in words: 1,225

Q 10.


Write the value of the 3 in the number : 43,521

Q 11.

Write the numbers in order from greatest to least :
98, 109, 85

Q 12.

Write the number shown.




Q 13.

Write down the value of the 7 in the number 78

Q 14.

Write the correct number in the blank.



Q 15.

Write “two hundred and nine” in numbers.

Q 16.

Write these numbers in order of size, starting with the smallest.

178 90 109 310

Q 17.

Write the digit that is in the hundreds place : 791

Q 18.

Write the number in figures : iii

Q 19.

Write "six hundred and sixty" in numbers.

Q 20.

Write down the value of the 7 in the answer to 7,491

Q 21.

Write the correct number in the blank.

$$892 = \underline{\hspace{2cm}} + 90 + 2$$

Q 22.

Circle the number that has the digit 5 in the tens column.

567

757

385


Q 23.

What number is represented below.



Q 24.

Write the correct number in the blank.



Q 25.

Write "seventy-five" in number.

Q 26.

Circle the odd numbers.

3 6 8 11

Q 27.

Write these numbers in order of size, starting with the smallest.

171 90 191 243

Q 28.

Write the digit that is in the hundreds place : 391

Q 29.

Write the number in figures : ii

Q 30.

Write the correct number in the blank

$$87 = 80 + \underline{\quad}$$

Q 31.

Write down the value of the 9 in the answer to 891

Q 32.

Write the correct number in the blank.

$$1034 = \underline{\hspace{2cm}} + 30 + 4$$

Q 33.

Write "four hundred and eight" in numbers.

Q 34.

Circle the number that has the digit 2 in the tens column.

242

2232

429

Q 35.

Circle all the even numbers.

2 5 8 9

Q 36.

Find the pattern and fill in the missing number.

645 - 640 - _____ - 630

Q 37.

Determine whether 5 is even or odd.

Answer

1. 600, 8000

2. 5931

3. even number

4. 234

5. 718

6. 90

7. 1571

8. $6000+80+2$

9. one thousand two hundred twenty-five

10. 3,000

11. 85, 98, 109

12. 500

13. 70

14. 151

15. 209

16. 90 109 178 310

17. 7

18. 3

19. 660

20. 7,000

21. 800

22. 757

23. 80

24. 7

25. 75

26. 3, 11

27. 90, 171, 191, 243

28. 3

29. 2

30. 7

31. 90

32. 1,000

33. 408

34. 429

35. 2, 8

36. 635

37. odd